


Name \_\_\_\_\_

# Quadrilaterals

Write all the names you can use for each quadrilateral.

1.




\_\_\_\_\_

2.



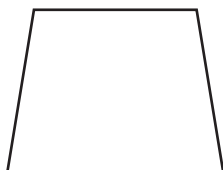
\_\_\_\_\_

3.



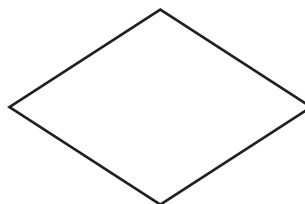
\_\_\_\_\_

4.



\_\_\_\_\_

5.



\_\_\_\_\_

6. Which is **NOT** a quadrilateral?

**A** rhombus

**B** rectangle

**C** right triangle

**D** trapezoid

7. **Writing to Explain** Explain why a square can never be a trapezoid.

\_\_\_\_\_

\_\_\_\_\_

\_\_\_\_\_